

# Topic Test 1 (20 minutes)

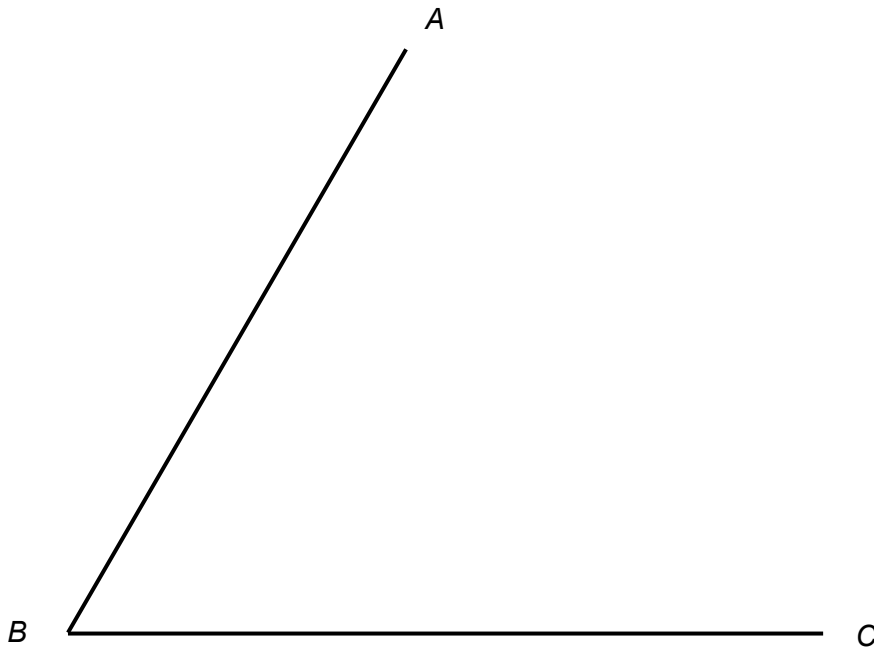
## Constructions and loci - Higher

---

You will need compasses, protractor and a ruler to answer these questions.

- 1 Construct the angle bisector of  $ABC$ .

[2 marks]



2 A simple computer drawing program uses three commands

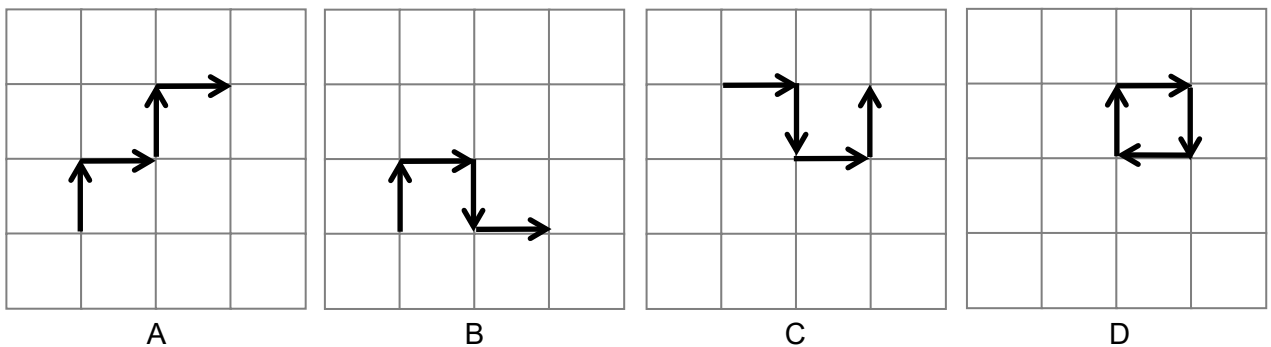
FORWARD  
TURN LEFT  
TURN RIGHT

2 (a) Maisy writes the following to draw a square.

FORWARD 1 cm  
TURN RIGHT  
FORWARD 1 cm  
TURN LEFT  
FORWARD 1 cm  
TURN RIGHT  
FORWARD 1 cm

Which of the following is the path that the computer draws.  
Circle the correct letter.

[1 mark]



2 (b) Complete this program to draw a rectangle 4 cm by 6 cm

[2 marks]

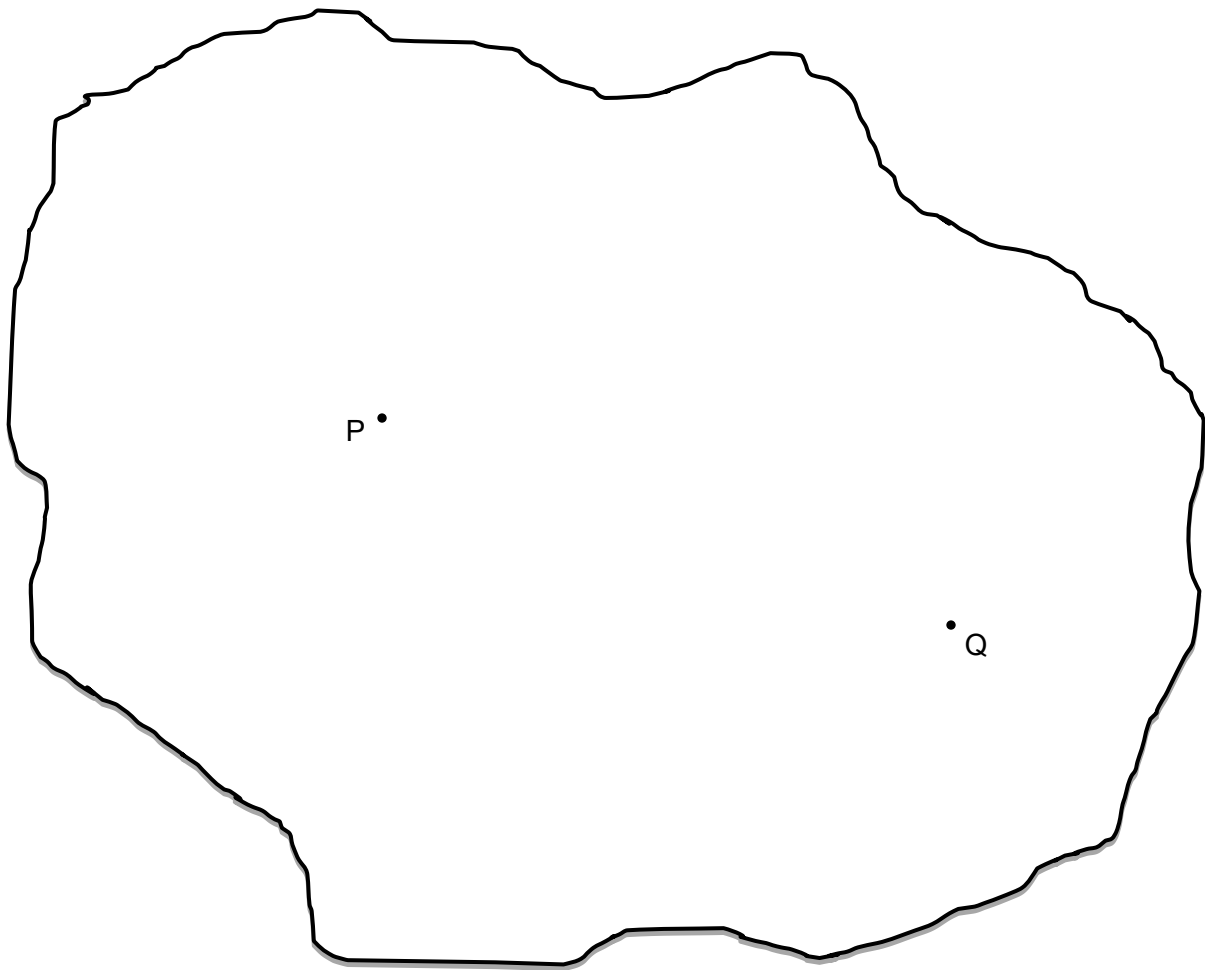
FORWARD 6 cm  
TURN RIGHT  
FORWARD ..... cm  
TURN .....  
FORWARD ..... cm  
TURN .....  
FORWARD ..... cm

- 3 Two mobile phone masts are on an island at P and Q.  
Both masts have a range of 60 kilometres.

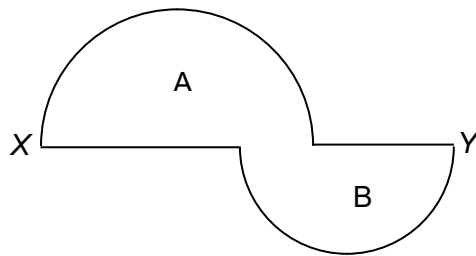
Shade on the map, the areas of the island where mobile phones do not get a signal.

**[2 marks]**

Scale: 1 cm represents 10 km



- 4 The sketch shows a shape made from 2 semicircles A and B.  
A has radius 4 cm  
B has radius 3 cm  
XY is a straight line.  
 $XY = 11\frac{1}{2}$  cm



Not drawn  
accurately

Construct an accurate drawing of the shape.

[2 marks]

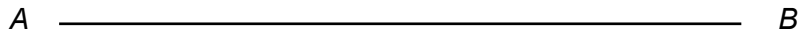
---

**5** Using a ruler and compasses only, construct triangle  $ABC$  such that

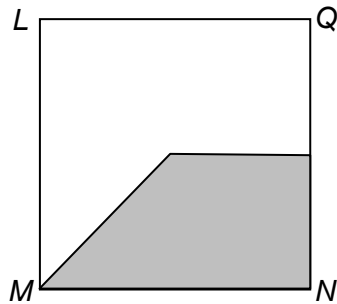
$AB = 10$  cm  
Angle  $CAB = 60^\circ$   
Angle  $ABC = 30^\circ$

The base  $AB$  has been drawn for you.

**[3 marks]**



6 A region is shaded within the square  $LMNQ$ .



$P$  is any point within the shaded region.

Which of the following describe  $P$ ?  
Circle the correct description.

[1 mark]

$PN \leq PL$  and  $PQ \geq PN$

$PN \geq PL$  and  $PQ \geq PN$

$PN \leq PL$  and  $PQ \leq PN$

$PN \geq PL$  and  $PQ \leq PN$

7 Construct the perpendicular from the point  $P$  to the line  $L$ .

[2 marks]

$P$   
×

\_\_\_\_\_ L

8 This puzzle was in a children's magazine.  
Solve the puzzle.

[3 marks]



---

9 Construct an angle of  $45^\circ$  at A.

[2 marks]

